


Name \_\_\_\_\_

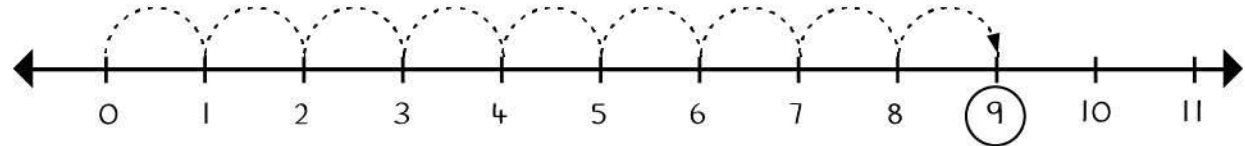
Date \_\_\_\_\_



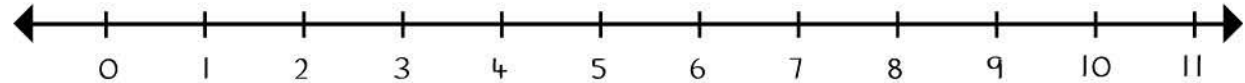
What number is Frog's final leap? Circle the number.

Example

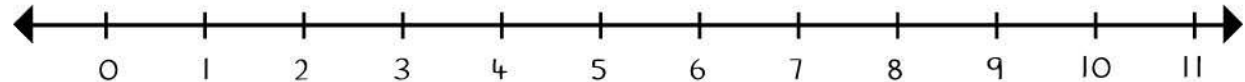
Frog leaps 6 spaces forward  
and 3 more forward



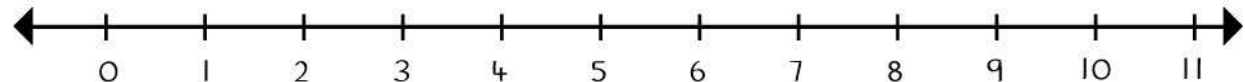
Frog leaps 3 spaces forward  
and 4 more forward



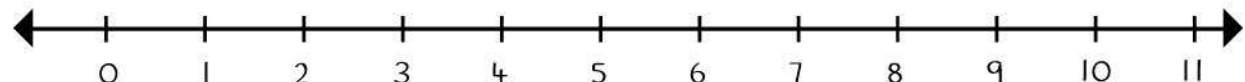
Frog leaps 2 spaces forward  
and 1 more forward



Frog leaps 4 spaces forward  
and 4 more forward



Frog leaps 6 spaces forward  
and 5 more forward



Frog leaps 4 spaces forward  
and 2 more forward

